

Urban

1. Which **two** of the following correctly describes the global changes that are happening to urban areas? (2 marks)

- a) Urban areas in HICs are increasing in size more quickly than in LICs
- b) Urban areas in LICs are increasing in size more quickly than in HICs
- c) The % of urban population globally is increasing
- d) The % of urban population globally is decreasing



2. Describe how the pattern of urban population in the world has been changing. (2 marks)

---

---

---

---

3. Explain **two** reasons why the rate of urbanisation is increasing globally (4 marks)

Reason 1 \_\_\_\_\_

---

---

---

---

Reason 2 \_\_\_\_\_

---

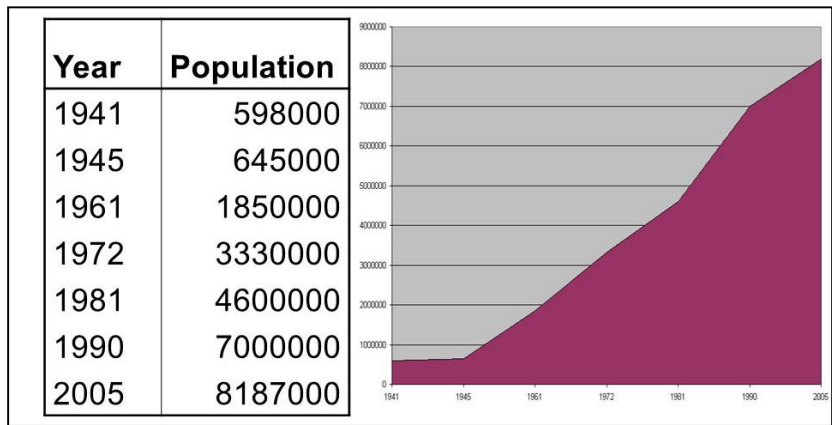
---

---

---

4. Study Figure 1 which shows the growth of the city of Lima in Peru, South America.

Figure 1



Describe the pattern of population change in Lima as shown in Figure 1

(2 marks)

---

---

---

---

5. Which type of country is Lima located in?

(1 mark)

HIC

LIC

6. Suggest one reason that would explain the population growth of Lima shown in Figure 1.

(2 marks)

---

---

---

---

7. Explain how push factors can cause rapid urban growth.

(4 marks)

---

---

---

---

---

---

---

---

---

---

8. Explain how pull factors can cause rapid urban growth.

(4 marks)

---

---

---

---

---

---

---

---

---

---

9. Complete the following sentences;

(9 marks)

Urbanisation is the growth in the \_\_\_\_\_ of people living \_\_\_\_\_ areas. It is caused by a combination of natural \_\_\_\_\_ and the \_\_\_\_\_ of people from \_\_\_\_\_ to urban areas. People leave rural areas due to \_\_\_\_\_ factors for example \_\_\_\_\_ and are attracted to urban areas due to \_\_\_\_\_ factors for example \_\_\_\_\_.





14. Using a named example of a major city in an LIC or NEE, assess the extent to which urban growth has improved access to services for the population. (9 marks +3 SPaG)

---

---

---

---

---

---

---

---

---

---

---

---

---

---

---

---

---

---

---

---

---

---

---

---

---

15. Using a named example of a major city in an LIC or NEE, describe the industrial growth the city has experienced in recent years. (4 marks)

---

---

---

---

---

---

---

---

---





18. Discuss whether urban growth in an LIC or NEE leads to the growth of environmental issues.

(6 marks)

---



---



---



---



---



---



---



---



---



---



---



---



---



---



---



---



---



---



---



---

19. Describe **two** environmental challenges that urban growth in LICs or NEEs can cause .

(4 marks)

---



---



---



---



---



---



---



---



---



---



---

20. Outline how a city in an LIC or NEE has addressed the challenge of providing healthcare or education for its population. (2 marks)

---



---



---



---

21. Explain the way a named city in an LIC or NEE has addressed the challenge of dealing with waste disposal. (4 marks)

---

---

---

---

---

---

---

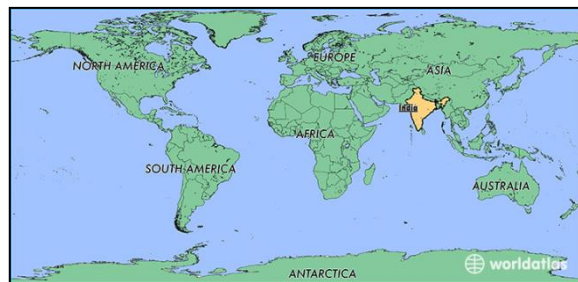
---

---

---

22. Study Figure 2 showing the location of Mumbai in India.

Figure 2



With reference to Figure 2, outline 2 advantages of the location of Mumbai as a global megacity. (4 marks)

Advantage 1

---

---

---

---

Advantage 2

---

---

---

---

23. Discuss whether the informal economy provides benefits for urban areas in LICs or NEEs. (4 marks)

---

---

---

---

---

---

---

---


---

---

---

24. Study Figure 3 showing a slum.

Figure 3



Describe the key features that characterise life in a slum. (2 marks)

---

---

---

---

26. Annotate Figure 3 to identify the main problems experienced by people living in slums. (4 marks)



27. How can unemployment in cities in LICs or NEEs be reduced?

(4 marks)

---

---

---

---

---

---

---

---

---

---

---

---















